

# Special Assignment -34

Class -2

DATE: 22.02.2021

SUBJECT-ENGLISH

---

## Revision Exercise

Do as directed :

### 1. Fill in the blanks with suitable articles given in the bracket .

- a) Mary wore \_\_\_\_\_ orange dress for the party. (a/an)  
b) \_\_\_\_\_ Taj Mahal is in Agra. ( a / the )

### 2. Write the opposites of the given adjectives.

- a) dirty x \_\_\_\_\_ b) cold x \_\_\_\_\_

### 3. Underline the subjects and circle the predicates.

- a) The boys are playing cricket .  
b) The cow likes to eat grass.

### 4. Fill in the blanks with suitable prepositions .

- a) My birthday is \_\_\_\_\_ August .(in/at)  
b) We have holiday \_\_\_\_\_ Sunday .(on/in)  
c) The cat is \_\_\_\_\_ the chair.( in/ under)



### 5. Fill up with appropriate verb.

- a) He \_\_\_\_\_ at my school .(teach/teaches)  
b) My father and mother \_\_\_\_\_ for walk daily.( go /goes)

**6. Join the pair of sentences using and .**

- a) We learn to sing at school. We learn to dance at school.
- b) I have a brother. I have a sister .

**7. my sister beautiful is ( Rearrange the words to make a meaningful sentence.  )**

**8. Read the clues .Complete these words with double letters :**

- a) not sad.      h a \_ \_ y
- b) a fruit.      a \_ \_ l e

**9. Change the given Adjectives into Adverbs of manner. \_\_\_\_\_**

- a) happy \_\_\_\_\_
- b) beautiful \_\_\_\_\_

10. See the picture given below and write three sentences about it :



---

---

---

विशेष कार्य – ३५

पुनरावृत्ति कार्य

कक्षा : २

विषय : हिंदी

दिनांक : २२ .०२ .२१

**पुनरावृत्ति (दिए गए सारे कार्य कॉपी में करें)**

प्र० क ) निम्नलिखित प्रश्नों के उत्तर लिखो ।

- १) बुढ़िया ने क्या उपाय सोचा ?
- २) किस प्रकार कपड़े बनाने की बात कही गई है ?
- ३) बुढ़िया किसमें बैठकर कहाँ जा रही थी ?
- ४) यीशु की माँ का क्या नाम था ?
- ५) आगरा में सृजन क्या देख कर दंग रह गया ?
- ६) लोग अपने-अपने घरों में तथा गिरजाघरों में तारे क्यों सजाते हैं ?
- ७) साहूकार दुखी क्यों हुआ ?
- ८) बच्चे किस-किस से प्यार भरी बातें करना चाहते हैं ?
- ९) साहूकार गधे को किस काम में लाता था ?
- १०) ताजमहल किस पत्थर का बना हुआ है ?

प्र० ख ) सही वाक्य के सामने ( ✓ ) और गलत वाक्य के सामने ( x ) का निशान लगाओ ।

- १) ताजमहल शाहजहाँ ने बनवाया । [     ]
- २) बुढ़िया बाज़ार जा रही थी । [     ]
- ३) बुढ़िया मूर्ख औरत थी । [     ]
- ४) बुढ़िया मटके में बैठ गई । [     ]

५ ) यीशु का जन्म गौशाला में हुआ था । [ ]

प्र० ३ ) दिए गए शब्दों के विलोम शब्द लिखें ।

गरम x

अंदर x

खुशबू x

नया x

ऊपर x

खुला x

अच्छा x

गीला x

सुबह x

अमीर x

प्र० ४ ) दिए गए गिनती के शब्दों को अंकों में लिखो ।

सात -

बारह -

पन्द्रह -

उन्नीस -

ग्यारह -

बीस -

प्र० ५ ) होली पर पाँच वाक्य लिखो ।

## REVISION ASSIGNMENT



STD:- 2

SUB:- Mathematics

Date :- 22.02.2021

---

### 1) Fill in the blanks:-

- a) Half litre= \_\_\_\_\_ ml
- b) \_\_\_\_\_ is the seventh month of the year.
- c) In the \_\_\_\_\_ season, there are beautiful flowers and plants all around us.
- d)  \_\_\_\_\_
- e) The product of any number and \_\_\_\_\_ is the number itself.
- f)  $27 \times 100 =$  \_\_\_\_\_
- g) If  $48 \div 6 = 8$  then  $8 \times 6 =$  \_\_\_\_\_
- h) \_\_\_\_\_ one – thirds together make 1 whole.
- i) 1 kg= \_\_\_\_\_ g
- j) Complete the pattern  \_\_\_\_\_
- k) July has \_\_\_\_\_ days.
- l) A leap year comes once in \_\_\_\_\_ years.
- m) \_\_\_\_\_ comes between Tuesday and Thursday.
- n) The number by which we divide is called \_\_\_\_\_.
- o) When a whole is divided into 3 equal parts , each part is called \_\_\_\_\_.
- p) The capacity of very small containers such as syringe is measured in \_\_\_\_\_.
- q) \_\_\_\_\_ has 29 days in a leap year.
- r) The sum of ₹ 160 and ₹ 15.25 is \_\_\_\_\_.
- s) The shorter hand of a clock is the \_\_\_\_\_ hand.

### 2) Write the time in two ways:-

a)



\_\_\_\_\_ , \_\_\_\_\_

b)



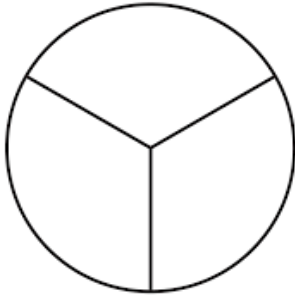
\_\_\_\_\_ , \_\_\_\_\_

**3) Write True or False:-**


- a) Weight is measured in centimeter and metre. \_\_\_\_\_
- b) Data is a collection of information, facts and figure. \_\_\_\_\_
- c) Division is repeated addition. \_\_\_\_\_
- d) 3:15 is also called quarter past 3. \_\_\_\_\_

**4) Colour the following figure, as per the fraction given:-**

a)  $\frac{1}{3}$



b)  $\frac{1}{4}$



5) Solve the following:-

a) 
$$\begin{array}{r} \overline{\hspace{2cm}} \\ 8 \overline{) 64} \end{array}$$

b) 
$$\begin{array}{r} 228 \\ \times 2 \\ \hline \end{array}$$

c) 

H	T	O
	3	9
X		5

6) Find the product using the number line.



$2 \times 7 = \square$

7) Amit bought a weighing machine. He calculated the weight of his friends and made a chart. Read the chart and answer the following questions:-

Name	Weight
Ajay	30 Kg
Reema	25 Kg
Raj	28 Kg
Samir	32 Kg
Saloni	30 Kg

- a) Who weighs the most? \_\_\_\_\_
- b) Which two friends weigh the same? \_\_\_\_\_
- c) Who weighs the least? \_\_\_\_\_
- d) What is the difference between Samir's and Reema's weight? \_\_\_\_\_ Kg



8) Write the following amounts in words:-

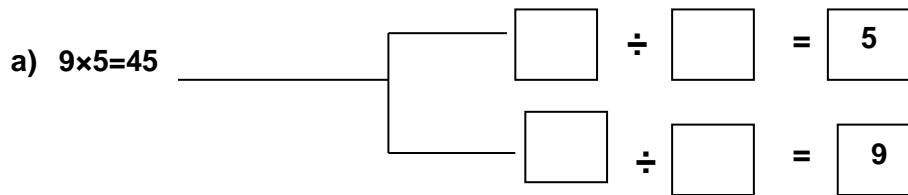
a) ₹49.80 \_\_\_\_\_

b) ₹92.25 \_\_\_\_\_

c) ₹ 36.50 \_\_\_\_\_

d) ₹215.75 \_\_\_\_\_

9) the division and multiplication facts: -



10) Solve the following:-

a. A milkman has 345L 500ml of milk. He sold 265L of milk during the day. How much milk is left with him?

b. One lorry can carry 134 boxes of medicines. How many such boxes can 3 lorries carry?

c. Mayank had ₹50.50 with him. His mother gave him ₹25.00. How much money does he have now?

d. Sara bought 1L 340 mL of oil on Sunday and 3L 450mL of oil on Tuesday. How much oil did Sara buy altogether?

e. Zubin had a piece of cloth measuring 56 m 79 cm. He cut out a piece measuring 44m 44cm. How much cloth is left with Zubin?

11) Complete the tables.

a)  $15 \times 7 =$

c)  $20 \times 4 =$

b)  $12 \times 8 =$

d)  $13 \times 5 =$

**REVISION ASSIGNMENT**

**STANDARD – 2**

**SUB – EVS**

**DATE: 22.02.21**

---

**Q. 1 Answer the following questions.**

- a) What is the sun?
- b) What are plains?
- c) What are wild animals?
- d) How is Diwali celebrated?
- e) What is a leap year?
- f) Name 3 main seasons in India.
- g) Name the different types of clothes.
- h) Write any 3 ways to save the earth.

**Q.2 Give two examples of each.**

- a) Parts of a plant.
- b) Religious festivals
- c) Seasons
- d) Landforms
- e) Types of plants
- f) Shrubs
- g) Plant eaters
- h) Types of train

**Q.3 Fill in the blanks.**

- a) Leather is used to make \_\_\_\_\_.
- b) Oceans have \_\_\_\_\_ water.
- c) Days are \_\_\_\_\_ in summer.
- d) \_\_\_\_\_ has 28 days.
- e) Deserts are \_\_\_\_\_ and \_\_\_\_\_ lands.
- f) There is no \_\_\_\_\_ to drink on the moon.
- g) Plants need \_\_\_\_\_ and \_\_\_\_\_ to grow.
- h) A \_\_\_\_\_ tells us time.

**Q. 4 Answer in one word.**

- a) Which festival is celebrated on 25<sup>th</sup> December?
- b) In which season trees shed their leaves?
- c) Who composed our National Anthem?
- d) When do we celebrate Republic Day?
- e) Who invented aeroplane?

- f) Which is the most colourful part of the plant?
- g) He was the first man to step on the moon.
- h) The model of the earth.

**Q.5** Tick (✓) the correct word.

- a) We get wool / silk from sheep.
- b) We should respect / disrespect our national symbols.
- c) Trees have hard / soft stem.
- d) Holi is the festival of lights / colours.
- e) Sun / Moon is earth's nearest neighbour.

**Q.6** Write (T) for true and (F) for false.

- a) Rain is good for crops.
- b) We fly kite on a rainy day.
- c) The sun is a star.
- d) February has 30 days.
- e) Plants are living things.
- f) We wear woollen clothes in summer season.